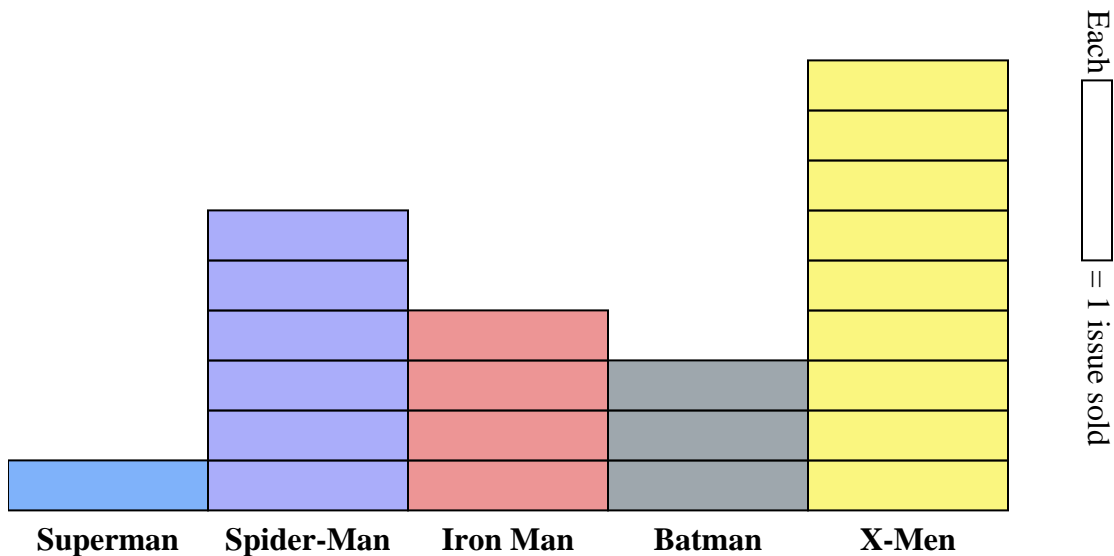


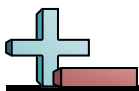


A comic store was tracking comic books sold. They recorded their sales in the bar graph below. Use their graph to answer the questions.

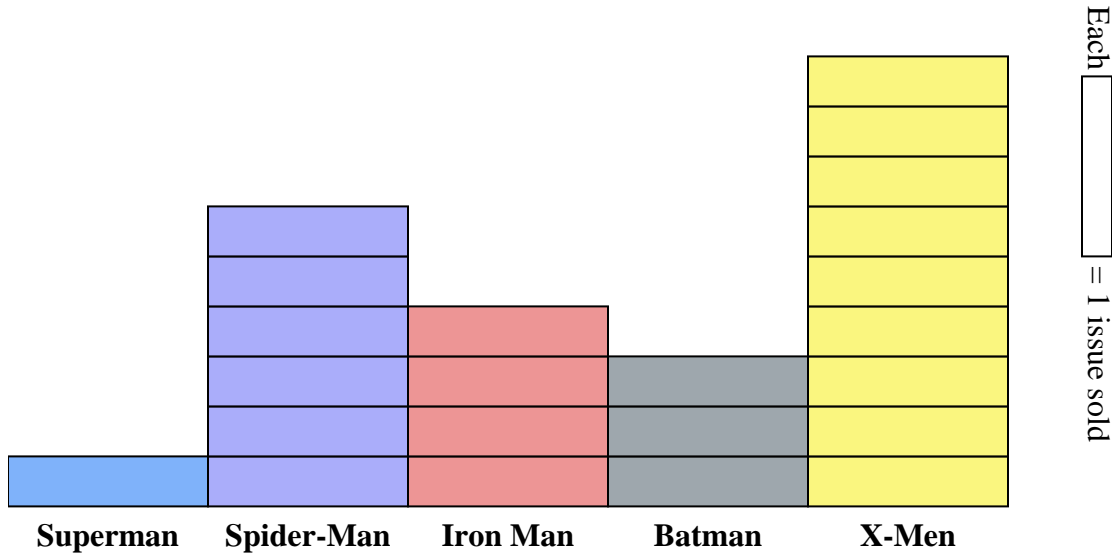
**Answers**

1. _____
2. _____
3. _____
4. _____
5. _____
6. _____
7. _____
8. _____
9. _____
10. _____

- 1) How many issues of Superman were sold?
- 2) Which comic series sold more, X-Men or Spider-Man?
- 3) Which sold fewer, issues of Superman or issues of Iron Man?
- 4) Which comic series sold exactly 1 issues?
- 5) What is the difference in the number of Iron Man issues sold and the number of Spider-Man issues sold?
- 6) What is the combined number of Batman and Spider-Man issues sold?
- 7) Which comic series sold the most issues?
- 8) Which comic series sold the fewest issues?
- 9) How many more issues of X-Men were sold than issues of Spider-Man?
- 10) How many fewer issues of Iron Man were sold than issues of Spider-Man?



A comic store was tracking comic books sold. They recorded their sales in the bar graph below. Use their graph to answer the questions.



- 1) How many issues of Superman were sold?
- 2) Which comic series sold more, X-Men or Spider-Man?
- 3) Which sold fewer, issues of Superman or issues of Iron Man?
- 4) Which comic series sold exactly 1 issues?
- 5) What is the difference in the number of Iron Man issues sold and the number of Spider-Man issues sold?
- 6) What is the combined number of Batman and Spider-Man issues sold?
- 7) Which comic series sold the most issues?
- 8) Which comic series sold the fewest issues?
- 9) How many more issues of X-Men were sold than issues of Spider-Man?
- 10) How many fewer issues of Iron Man were sold than issues of Spider-Man?

Answers

1. **1**
2. **X-Men**
3. **Superman**
4. **Superman**
5. **2**
6. **9**
7. **X-Men**
8. **Superman**
9. **3**
10. **2**